

9

6

2
2

3

1

10

Mathemonsterchen
rechnet mit
Zahlenkärtchen

2

7

1
3

5

4

2
8



www.mathemonsterchen.de

1 2 3 4 5 6 7 8 9 10

9 8 7 6 5 4 3 2 1
1 2 3 4 5 6 7 8 9 10

Lege die Aufgaben mit deinen Zahlenkärtchen.

$7 + 1 = 8$

$3 + 1 = \underline{\quad}$

$4 + 1 = \underline{\quad}$

$9 + 1 = \underline{\quad}$

$6 + 1 = \underline{\quad}$

$8 + 1 = \underline{\quad}$



$2 + 1 = \underline{\quad}$


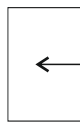
$1 + 1 = \underline{\quad}$

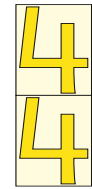
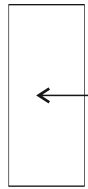
$5 + 1 = \underline{\quad}$


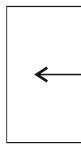
Verliebte Zahlen - Immer 10



Lege mit deinen Zahlenkärtchen und schreibe die Plusaufgabe.




 ← 7
5 + 2 = 7


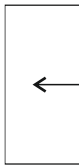

 ← —




 ← —


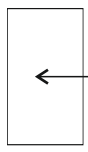

 ← —


 ← —




 ← —




 ← —


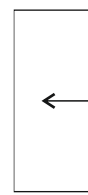

 ← —


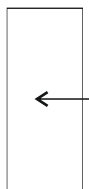

 ← —

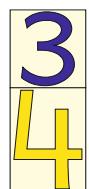
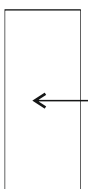
Lege mit deinen Zahlenkärtchen und schreibe die Plusaufgabe.




 ← —




 ← —


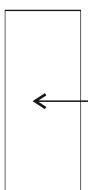

 ← —




 ← —


 ← —

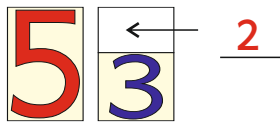

 ← —


 ← —

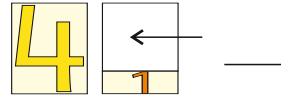

 ← —


 ← —

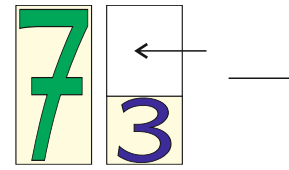
Welche Zahlenkärtchen passen ? Schreibe die Ergänzungsaufgabe.



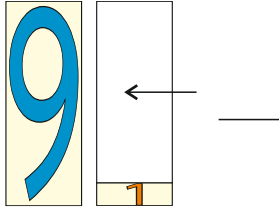
$$5 = 3 + 2$$



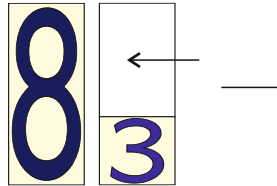
$$4 = 1 + \underline{\quad}$$



$$7 = 3 + \underline{\quad}$$



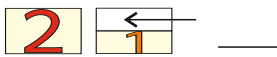
$$9 = 1 + \underline{\quad}$$



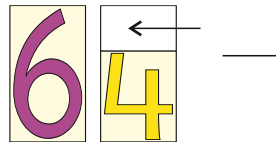
$$8 = 3 + \underline{\quad}$$



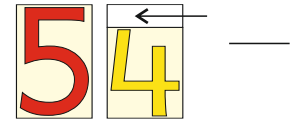
$$3 = 2 + \underline{\quad}$$



$$2 = 1 + \underline{\quad}$$

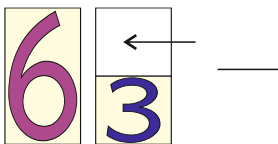


$$6 = 4 + \underline{\quad}$$

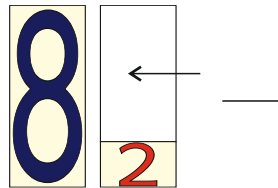


$$5 = 4 + \underline{\quad}$$

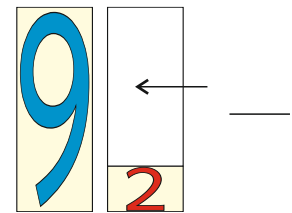
Welche Zahlenkärtchen passen ? Schreibe die Ergänzungsaufgabe.



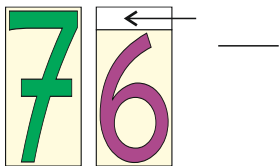
$$6 = \underline{\quad}$$



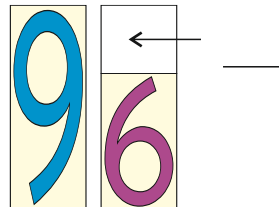
$$8 = \underline{\quad}$$



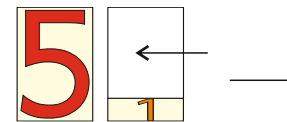
$$9 = \underline{\quad}$$



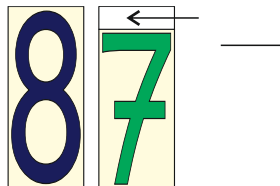
$$7 = \underline{\quad}$$



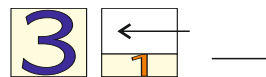
$$9 = \underline{\quad}$$



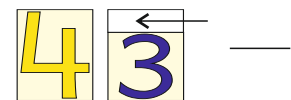
$$5 = \underline{\quad}$$



$$8 = \underline{\quad}$$



$$3 = \underline{\quad}$$



$$4 = \underline{\quad}$$

Welche Zahlenkärtchen passen? Schreibe die Ergänzungsaufgabe.

9 = _____

6 = _____

7 = _____

7 = _____

5 = _____

8 = _____

8 = _____

9 = _____

6 = _____

Die Zahlenkärtchen von 1 bis 20

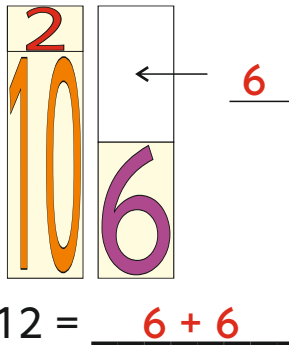
1 2 3 4 5 6 7 8 9 10

1 _____

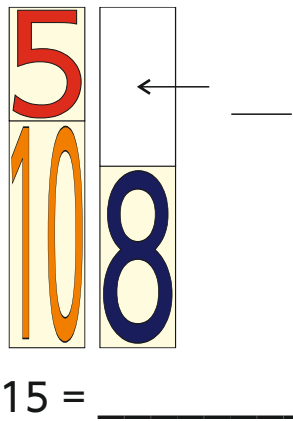
10 10 10 10 10 10 10 10 10 20

11 _____

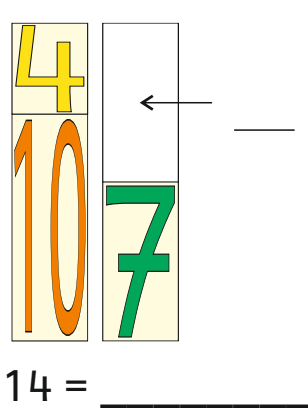
Welche Zahlenkärtchen passen ? Schreibe die Ergänzungsaufgabe.



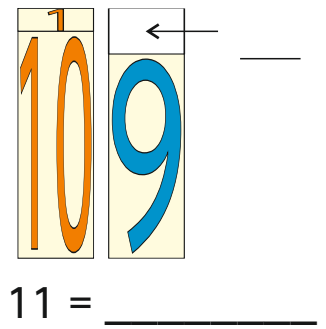
12 = 6 + 6



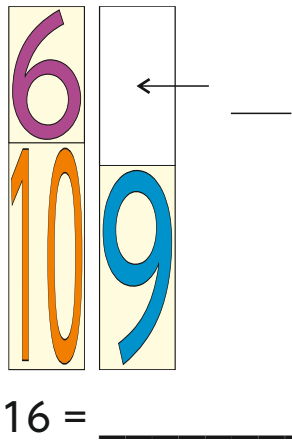
15 = _____



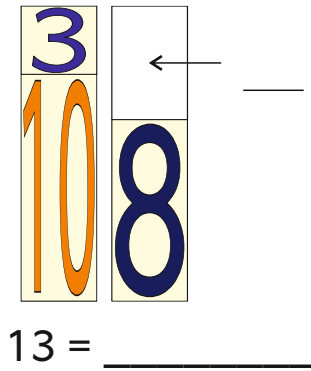
14 = _____



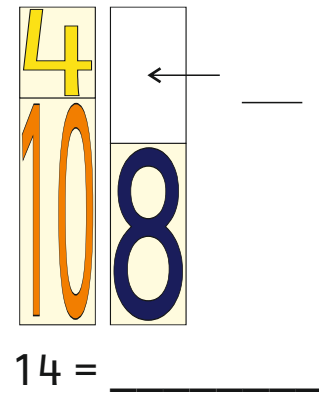
11 = _____



16 = _____

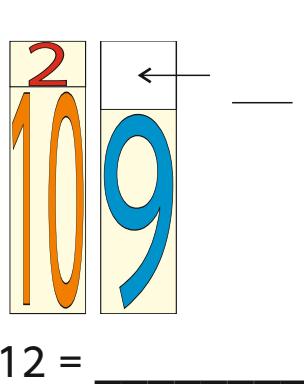


13 = _____

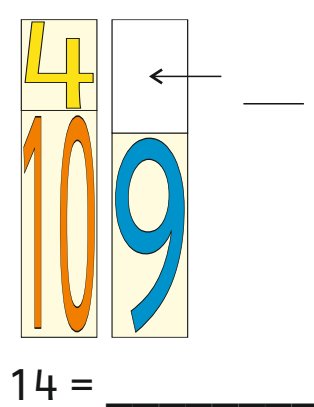


14 = _____

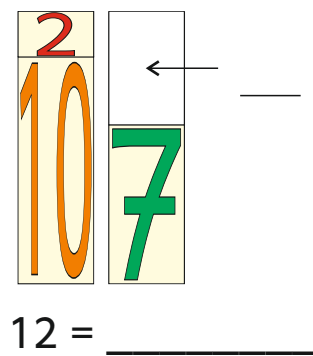
Welche Zahlenkärtchen passen ? Schreibe die Ergänzungsaufgabe.



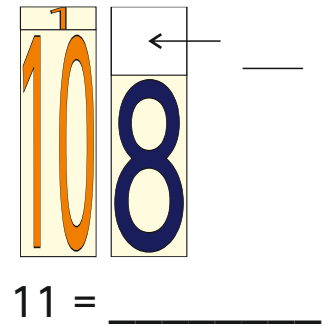
12 = _____



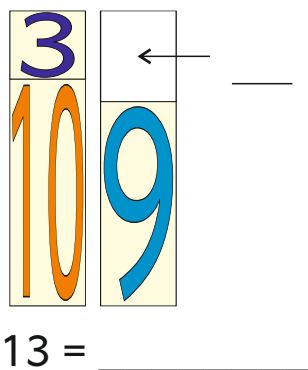
14 = _____



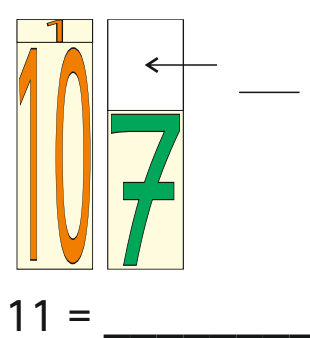
12 = _____



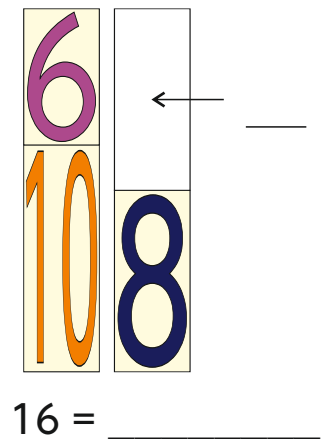
11 = _____



13 = _____



11 = _____



16 = _____

Welche Zahlenkärtchen passen? Schreibe die Ergänzungsaufgabe.

15 = _____

17 = _____

12 = _____

11 = _____

13 = _____

18 = _____

Addition und Multiplikation mit Zahlenkärtchen

$1+1+1+1+1+1+1+1+1+1+1+1+1+1+1 = 15$

$15 \cdot 1 = 15$

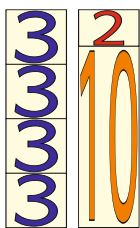
$3+3+3+3+3 = 15$

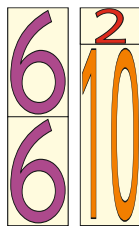
$5 \cdot 3 = 15$

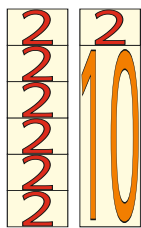
$5+5+5 = 15$

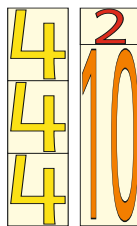
$3 \cdot 5 = 15$

Schreibe immer die Additions- und Multiplikationsaufgabe.

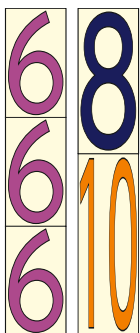


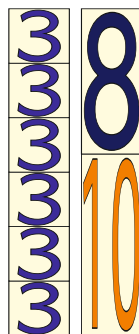


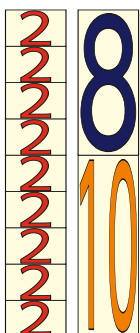





Schreibe immer die Additions- und Multiplikationsaufgabe.

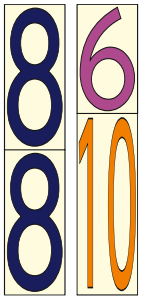





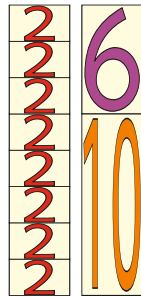




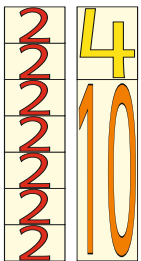
Schreibe immer die Additions- und Multiplikationsaufgabe.

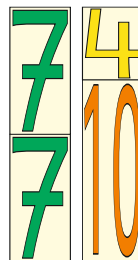


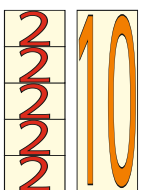





Schreibe immer die Additions- und Multiplikationsaufgabe.









Finde die Multiplikationsaufgabe.

	6
	10

	2
	10

	2
	10

	6
	10

	5
	10

	5
	10

Finde die Multiplikationsaufgabe.

	8
	10

	8
	10

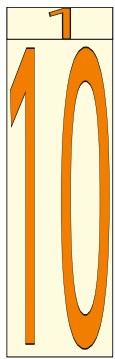
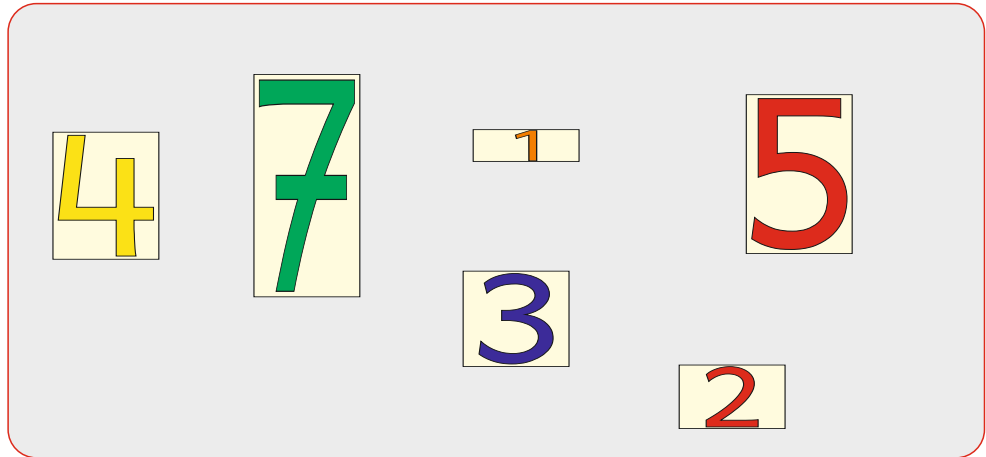
	4
	10

	8
	10

	8
	10

	4
	10

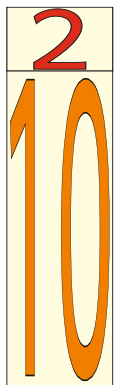
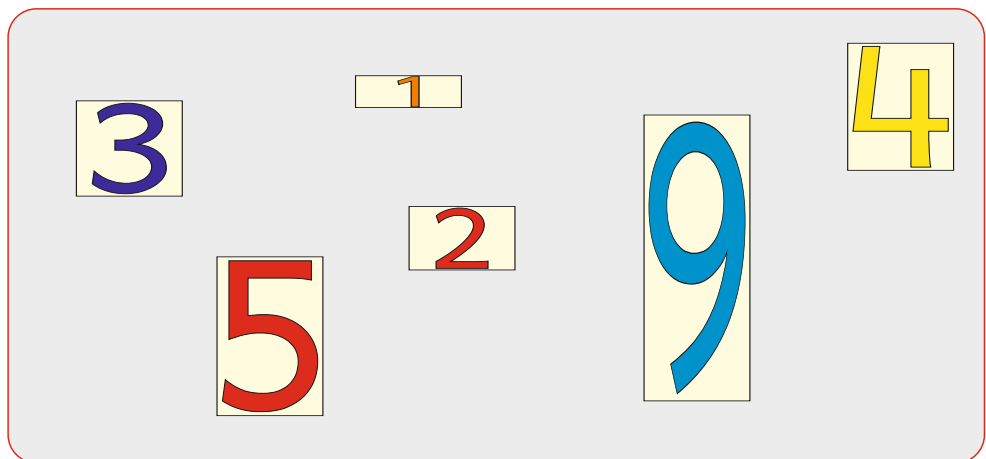
Bilde mit den Kärtchen 2 Plusaufgaben.
 Du darfst jedes Kärtchen nur einmal benutzen.



$$\underline{\quad\quad} + \underline{\quad\quad} + \underline{\quad\quad} = 11$$

$$\underline{\quad\quad} + \underline{\quad\quad} + \underline{\quad\quad} = 11$$

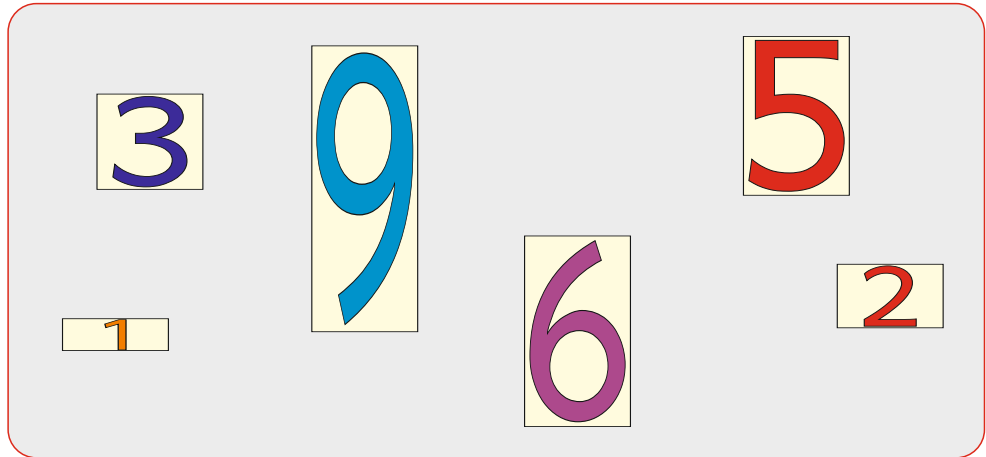
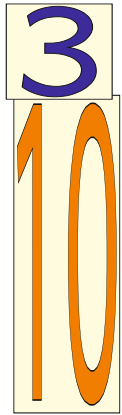
Bilde mit den Kärtchen 2 Plusaufgaben.
 Du darfst jedes Kärtchen nur einmal benutzen.



$$\underline{\quad\quad} + \underline{\quad\quad} + \underline{\quad\quad} = 12$$

$$\underline{\quad\quad} + \underline{\quad\quad} + \underline{\quad\quad} = 12$$

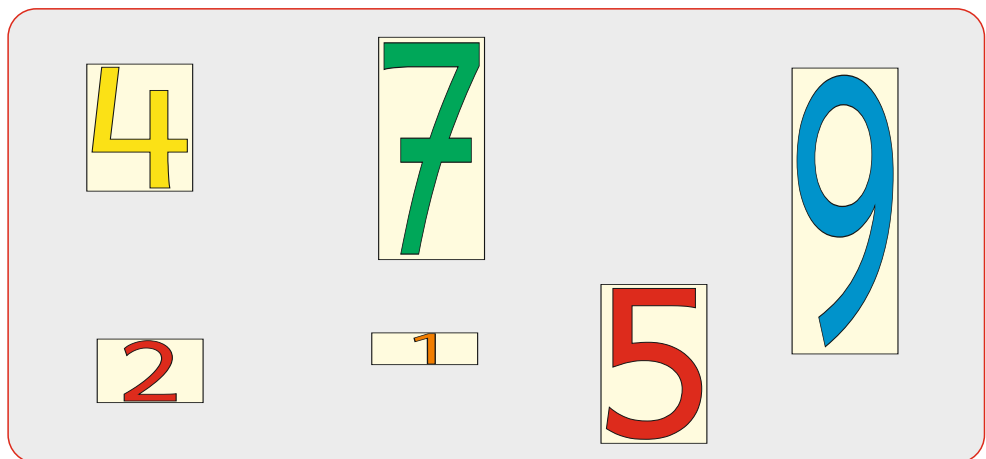

Bilde mit den Kärtchen 2 Plusaufgaben.
 Du darfst jedes Kärtchen nur einmal benutzen.



$$\underline{\quad} + \underline{\quad} + \underline{\quad} = 13$$

$$\underline{\quad} + \underline{\quad} + \underline{\quad} = 13$$

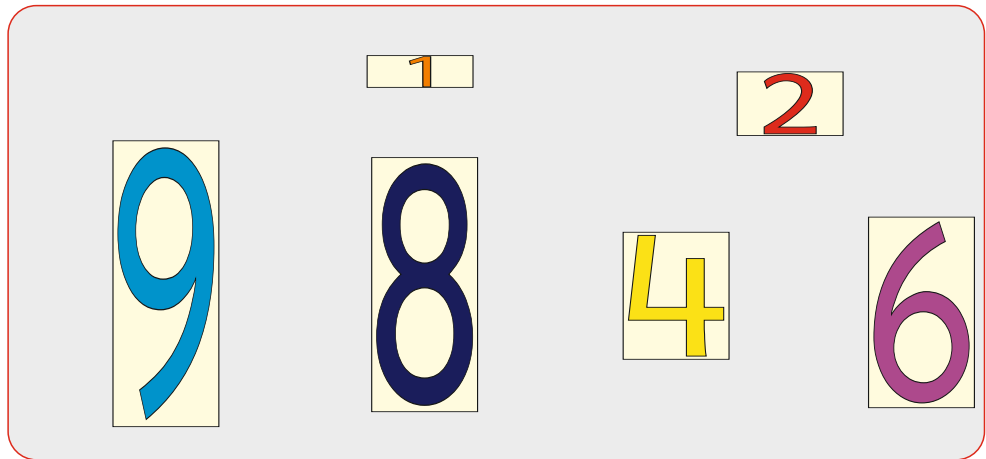

Bilde mit den Kärtchen 2 Plusaufgaben.
 Du darfst jedes Kärtchen nur einmal benutzen.



$$\underline{\quad} + \underline{\quad} + \underline{\quad} = 14$$

$$\underline{\quad} + \underline{\quad} + \underline{\quad} = 14$$

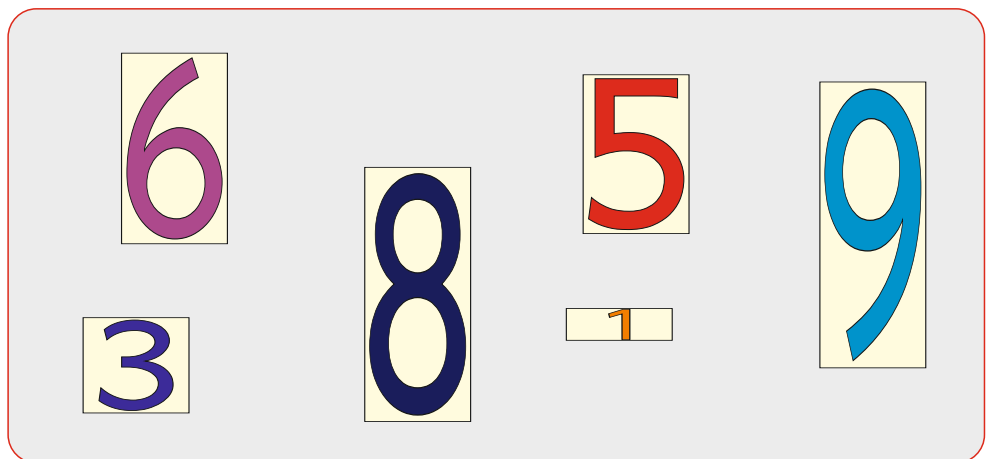
Bilde mit den Kärtchen 2 Plusaufgaben.
 Du darfst jedes Kärtchen nur einmal benutzen.



$$\underline{\quad\quad} + \underline{\quad\quad} + \underline{\quad\quad} = 15$$

$$\underline{\quad\quad} + \underline{\quad\quad} + \underline{\quad\quad} = 15$$

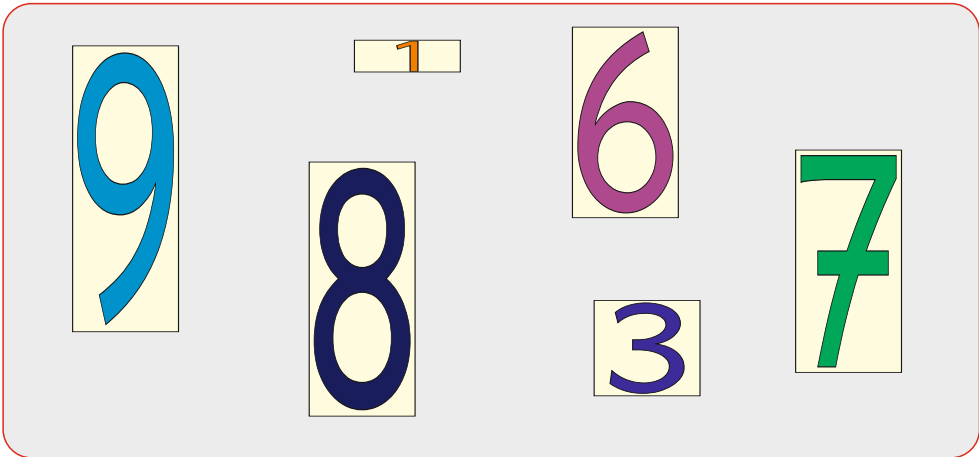
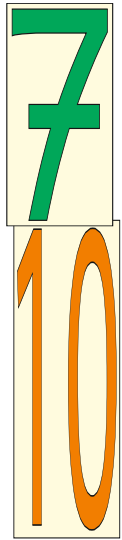
Bilde mit den Kärtchen 2 Plusaufgaben.
 Du darfst jedes Kärtchen nur einmal benutzen.



$$\underline{\quad\quad} + \underline{\quad\quad} + \underline{\quad\quad} = 16$$

$$\underline{\quad\quad} + \underline{\quad\quad} + \underline{\quad\quad} = 16$$

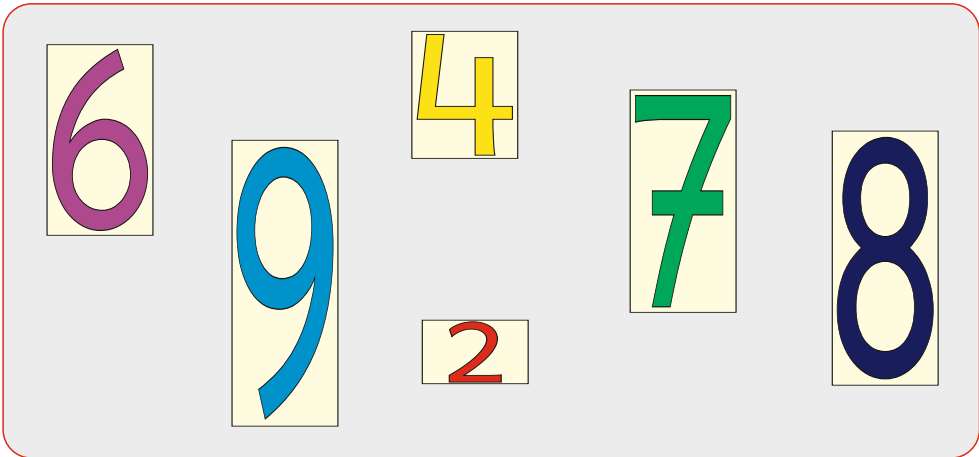
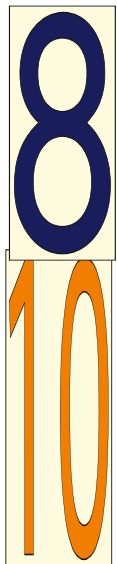
Bilde mit den Kärtchen 2 Plusaufgaben.
 Du darfst jedes Kärtchen nur einmal benutzen.



$$\underline{\quad\quad\quad} + \underline{\quad\quad\quad} + \underline{\quad\quad\quad} = 17$$

$$\underline{\quad\quad\quad} + \underline{\quad\quad\quad} + \underline{\quad\quad\quad} = 17$$

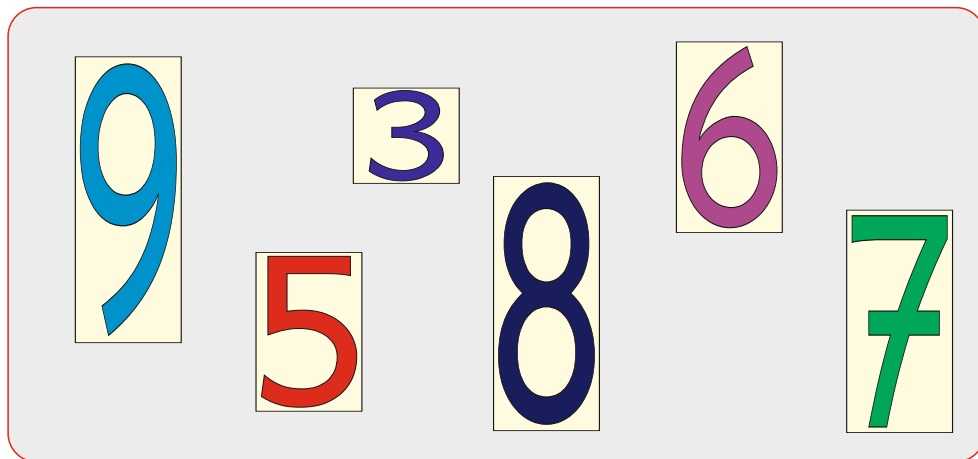
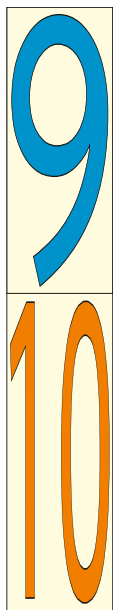
Bilde mit den Kärtchen 2 Plusaufgaben.
 Du darfst jedes Kärtchen nur einmal benutzen.



$$\underline{\quad\quad\quad} + \underline{\quad\quad\quad} + \underline{\quad\quad\quad} = 18$$

$$\underline{\quad\quad\quad} + \underline{\quad\quad\quad} + \underline{\quad\quad\quad} = 18$$

Bilde mit den Kärtchen 2 Plusaufgaben.
Du darfst jedes Kärtchen nur einmal benutzen.



$$\underline{\quad\quad} + \underline{\quad\quad} + \underline{\quad\quad} = 19$$
$$\underline{\quad\quad} + \underline{\quad\quad} + \underline{\quad\quad} = 19$$

Bilde mit den Kärtchen 2 Plusaufgaben.
Du darfst jede Zahl nur einmal benutzen.

Material zum Buch: „Die kleine Eins“ von Felix Walk

Achtung: Die „10“ hat jetzt die gleiche Breite
wie die anderen Zahlen,
um die Zahlen besser im ZR 20 darzustellen.

